


Nombre _____ Fecha _____


Recuerda

- De dos fracciones con igual denominador, es mayor la fracción que tiene el numerador mayor.
- De dos fracciones con igual numerador, es mayor la fracción que tiene el denominador menor.


1. Primero, escribe la fracción que representa la parte coloreada de cada figura. Después, compara y completa.



$$\frac{1}{4}$$




$$\frac{2}{4}$$




—




—




—



—



—




—


2. Primero, escribe la fracción que representa la parte de cada color. Después, compara y completa.



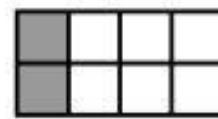
$$\frac{1}{2}$$




$$\frac{1}{3}$$



—



—




—



—



—



—

3. Escribe el signo < o > según corresponda.

$$\frac{2}{4} \bigcirc$$

$$\frac{1}{4}$$

$$\frac{3}{5} \bigcirc$$

$$\frac{3}{6}$$

$$\frac{4}{2} \bigcirc$$

$$\frac{5}{2}$$

$$\frac{2}{3} \bigcirc$$

$$\frac{2}{7}$$

$$\frac{6}{9} \bigcirc$$

$$\frac{2}{9}$$