


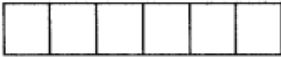








FRACCIONES

Colorea la fracción que se te pide.

 $\frac{5}{5}$ cinco quintos	 $\frac{1}{6}$ un sextos
 $\frac{4}{5}$ cuatro quintos	 $\frac{4}{6}$ cuatro sextos
 $\frac{1}{5}$ un quinto	 $\frac{2}{6}$ dos sextos
 $\frac{2}{5}$ dos quintos	 $\frac{3}{6}$ tres sextos
 $\frac{3}{5}$ tres quintos	 $\frac{5}{6}$ cinco sextos

Observando el ejercicio anterior, escribe los signos $>$, $<$ o $=$ según corresponda.


$\frac{1}{5}$ <input type="checkbox"/>	$\frac{3}{5}$	$\frac{4}{6}$ <input type="checkbox"/>	$\frac{3}{6}$	$\frac{5}{6}$ <input type="checkbox"/>	$\frac{5}{6}$
$\frac{4}{5}$ <input type="checkbox"/>	$\frac{5}{5}$	$\frac{4}{5}$ <input type="checkbox"/>	$\frac{2}{5}$	$\frac{2}{6}$ <input type="checkbox"/>	$\frac{4}{6}$

Escribe las letras que corresponden a cada fracción y aparecerá un mensaje. 















Comparación de fracciones



Bim. 2
Sem. 16
Ficha. 96 



$\frac{4}{5}$	$\frac{3}{4}$	$\frac{1}{6}$	$\frac{1}{2}$	$\frac{1}{5}$			
$\frac{1}{2}$	$\frac{1}{3}$	$\frac{4}{6}$	$\frac{3}{6}$	$\frac{3}{4}$			
$\frac{1}{3}$	$\frac{1}{2}$	$\frac{3}{5}$	$\frac{2}{4}$	$\frac{4}{6}$	$\frac{1}{2}$	$\frac{2}{3}$	$\frac{3}{4}$

				
S	T	R	A	U
				
I	N	G	O	Y
				
M	C			

